

**Ai Tong School**  
**Formative Assessment 2015**  
**Term 1 Topical Review ( 2 )**  
**Addition and Subtraction within 1000/Word Problems**

Name: \_\_\_\_\_

Date : \_\_\_\_\_

Class : 2 \_\_\_\_\_

---

**Section A**

**Add or subtract the following carefully.**

1.

$$\begin{array}{r} 195 \\ - 23 \\ \hline \\ \hline \end{array}$$

2.

$$\begin{array}{r} 806 \\ + 52 \\ \hline \\ \hline \end{array}$$

3.

$$\begin{array}{r} 67 \\ + 35 \\ \hline \end{array}$$

4.

$$\begin{array}{r} 965 \\ - 28 \\ \hline \\ \hline \end{array}$$

5.

$$\begin{array}{r} 138 \\ - 84 \\ \hline \\ \hline \end{array}$$

6.

$$\begin{array}{r} 256 \\ + 92 \\ \hline \\ \hline \end{array}$$

7. Find the sum of 564 and 239.

Ans:

8.  +  +  = 58

 +  = 34


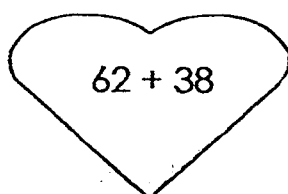

What is the value of  ?

Ans:

9. The sum of two numbers is 589. If the smaller number is 145, find the bigger number.

Ans:

10. Circle the heart with the **greatest** value.

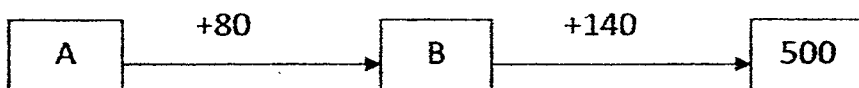


11. 
$$\begin{array}{r} 574 \\ - 23\boxed{\phantom{0}} \\ \hline 336 \\ \hline \end{array}$$

What is the missing number in the  $\boxed{\phantom{0}}$ ?

Ans:  $\boxed{\phantom{000}}$

12. Find the values of A and B.



A:  $\boxed{\phantom{000}}$

B:  $\boxed{\phantom{000}}$

13.  $293 = \boxed{\phantom{000}} - 348$

14. Subtract 319 from 800.

Ans:  $\boxed{\phantom{000}}$

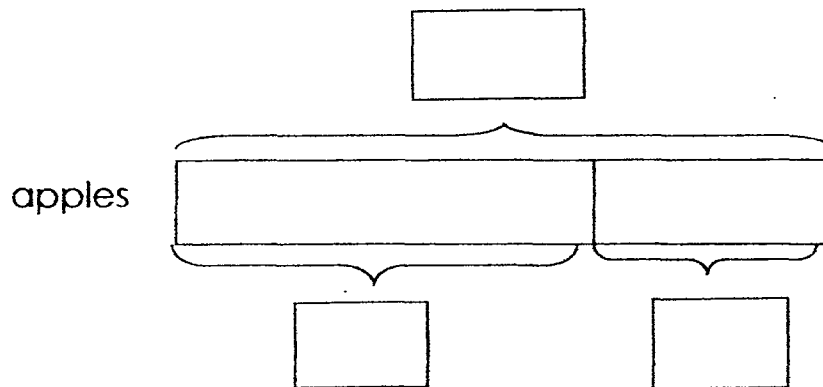
## Section B

15. Complete the model below by filling in the boxes with the **correct numbers** and a **question mark** [?].

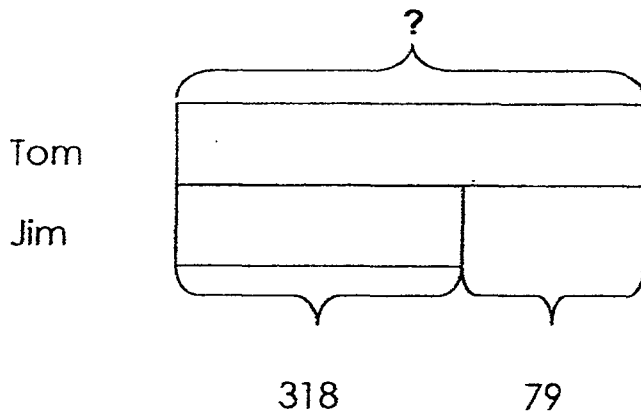
Sandra bought 420 apples.

She used some of the apples to bake some pies.

After that, she had 157 apples left. How many apples were used to bake the pies?



16. Study the model. Fill in the blanks below.

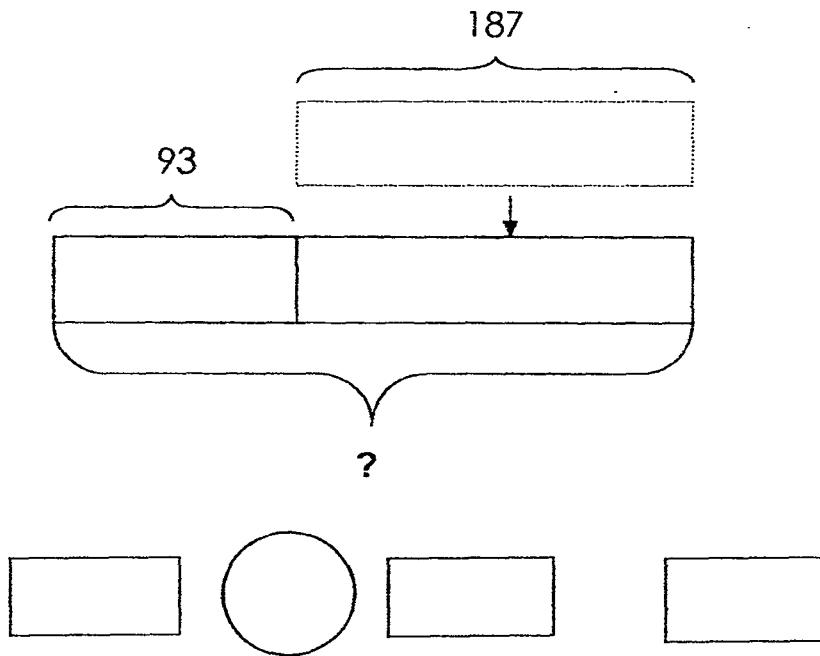


Jim has \_\_\_\_\_ marbles.

Tom has \_\_\_\_\_ more marbles than Jim.

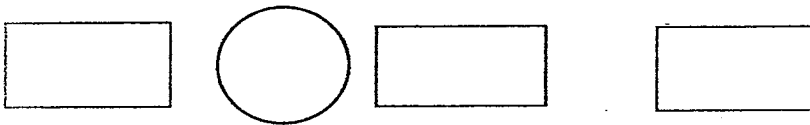
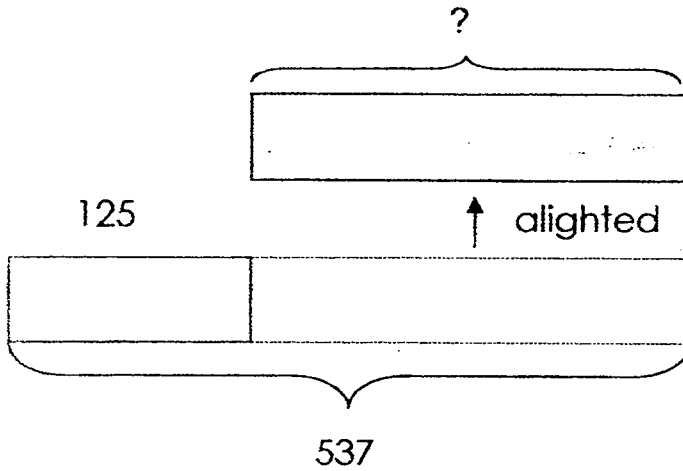
Tom has \_\_\_\_\_ marbles.

17. 93 boys were seated at the stadium.  
187 girls joined them at the stadium.  
How many children were there at the stadium?



There were \_\_\_\_\_ children at the stadium.

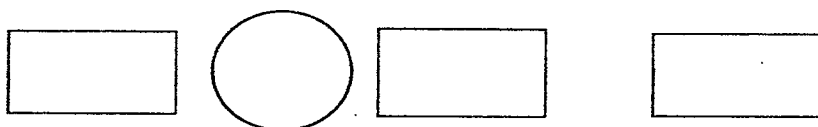
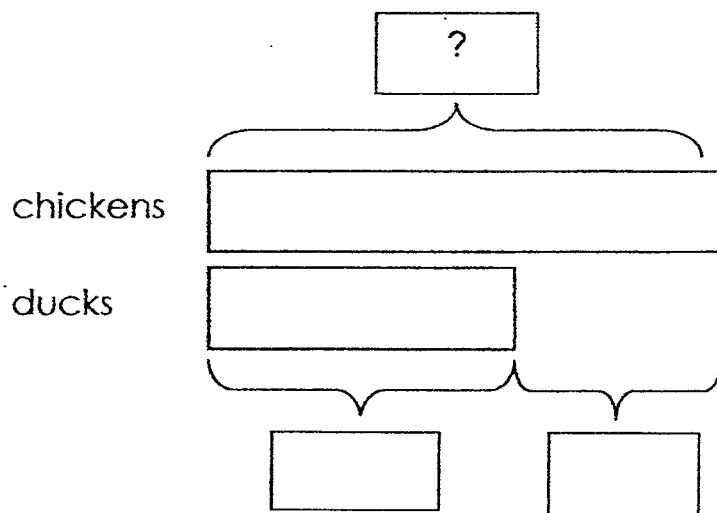
18. There were 537 passengers on a plane.  
Some of them alighted at the airport.  
125 passengers were left on the plane.  
How many passengers alighted at the airport?



\_\_\_\_\_ passengers alighted at the airport.

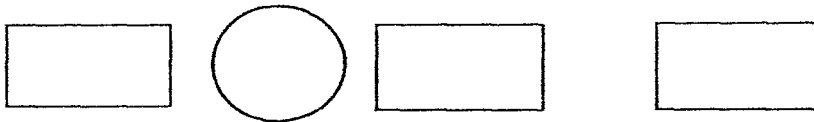
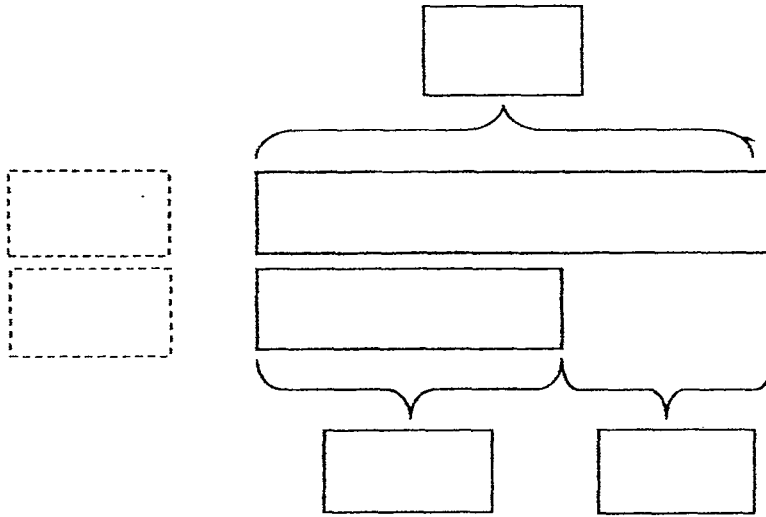
19. Complete the model below by filling in the boxes.  
Show your working carefully.

Farmer Lee had 159 more chickens than ducks on the farm.  
If he had 367 ducks on the farm,  
how many chickens did Farmer Lee have?



Farmer Lee had \_\_\_\_\_ chickens on the farm.

20. Alice read 416 pages of a book on Monday.  
She read 127 more pages than John.  
How many pages of the book did John read?



John read \_\_\_\_\_ pages of the book.

Check your work carefully 😊

**EXAM PAPER 2015**

**LEVEL : PRIMARY 2**

**SCHOOL : AI TONG SCHOOL**

**SUBJECT : MATHEMATICS**

**TERM : TERM 1 TOPICAL REVIEW 2**

Q1. 172 Q2. 858 Q3. 102 Q4. 937

Q5. 54 Q6. 348 Q7. 803 Q8. 24

Q9. 444 Q10.  $62+38$

Q11. 8 Q12. A: 280, B: 360

Q13. 641 Q14. 481

Q15. **SEE PICTURE**

Q16. Jim has 318 marbles.

Tom has 79 more marbles than Jim.

Tom has 397 marbles.

Q17.  $93+187=280$

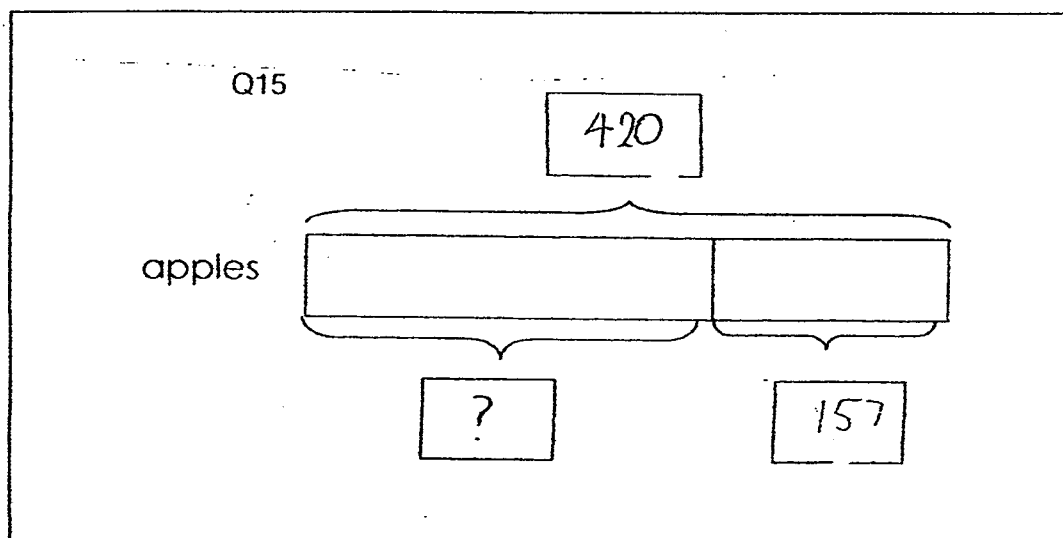
There were 280 children at the stadium.

Q18.  $537-125=412$

412 passengers alighted at the airport.

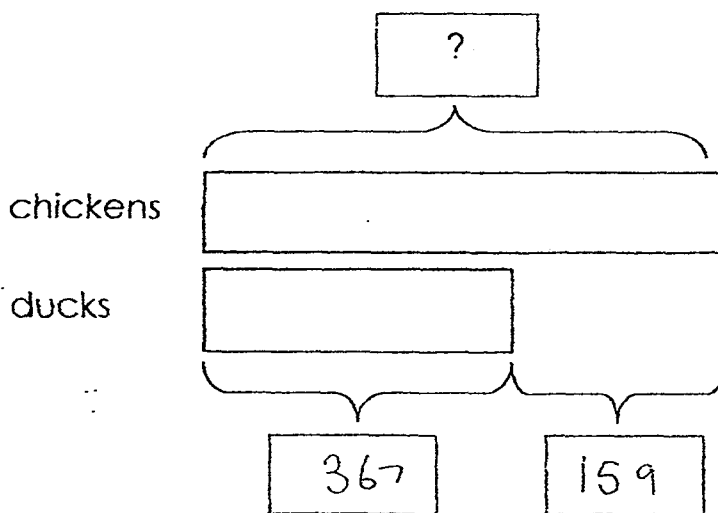
Q19. **SEE PICTURE**

Q20. **SEE PICTURE**



19. Complete the model below by filling in the boxes.  
Show your working carefully.

Farmer Lee had 159 more chickens than ducks on the farm.  
If he had 367 ducks on the farm,  
how many chickens did Farmer Lee have?

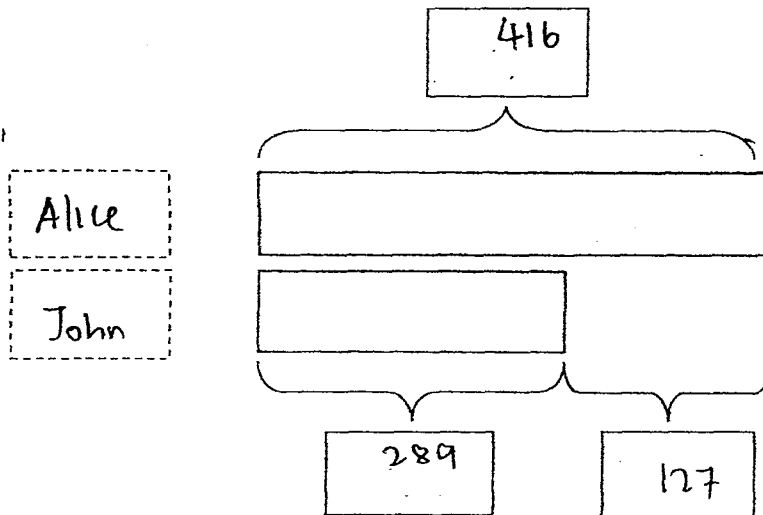


$$\boxed{367} + \boxed{159} = \boxed{526}$$

Farmer Lee had 526 chickens on the farm.

20. Alice read 416 pages of a book on Monday.  
She read 127 more pages than John.

How many pages of the book did John read?



$$\boxed{416} - \boxed{127} = \boxed{289}$$

John read 289 pages of the book.

Check your work carefully 😊

